



NAME _____

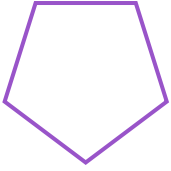
DATE _____

COUNT SIDES AND CORNERS


Tick (✓) on the correct answer.

Example:

How many sides does this shape have?

 4 3 2 5

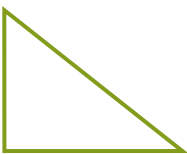
1. How many corners does this shape have?

 4 3 2 5

2. How many sides does this shape have?

 4 3 2 5

3. How many sides does this shape have?

 4 3 2 5

4. How many corners does this shape have?

 4 3 2 5